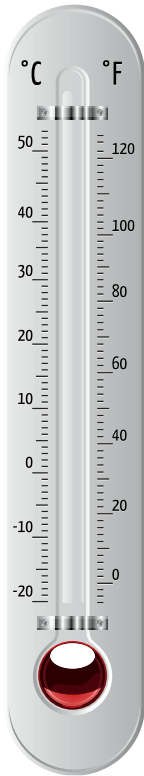


MEASURING TEMPERATURE

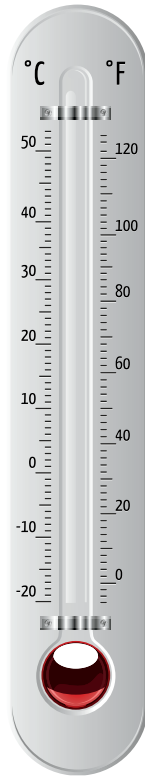
Thermometer Reading

Most thermometers give readings in both Celsius and Fahrenheit. Each thermometer below needs to show a different temperature in Fahrenheit. Each line on the thermometer stands for 2 degrees. Color in the temperature below. What is the temperature in Celsius? Write the answer in the blank!



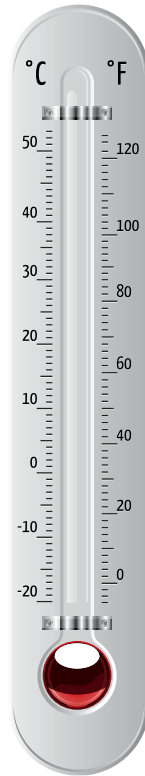
80°F

_____ °C



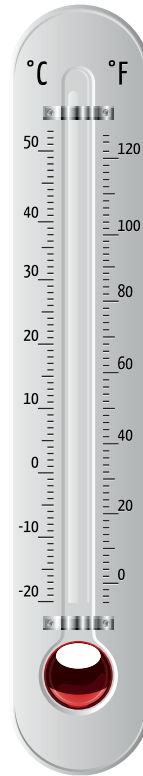
10°F

_____ °C



50°F

_____ °C



32°F

_____ °C



POPBOOKSONLINE.COM

©2020 Pop!